

ΜΑΘΗΜΑ: ΜΑΘΗΜΑΤΙΚΑ
ΤΑΞΗ: Α
ΕΝΟΤΗΤΑ: ΠΡΟΣΘΕΣΗ ΜΕ ΥΠΕΡΒΑΣΗ ΤΗΣ ΔΕΚΑΔΑΣ
ΟΝΟΜΑ:



1. Βρίσκω ποιος αριθμός λείπει:

7	3
όλα είναι 12	

8	2
όλα είναι 15	

6	4
όλα είναι 16	



2. Αντιστοιχίζω το αποτέλεσμα της κάθε πρόσθεσης με το σωστό μπαλόνι:


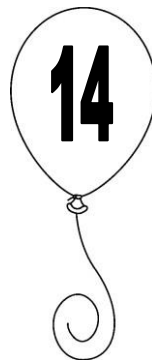

$8 + 2 + 5 =$

$6 + 4 + 2 =$

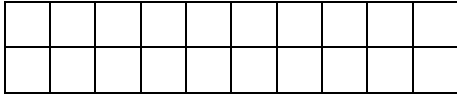
$5 + 5 + 4 =$

$9 + 1 + 3 =$

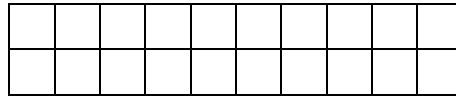
$7 + 3 + 8 =$



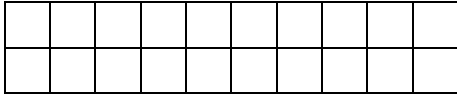
3. Χρωματίζω με διαφορετικό χρώμα και βρίσκω το άθροισμα:



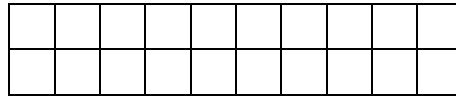
$$6 + 5 = \dots\dots$$



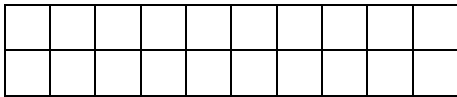
$$7 + 6 = \dots\dots$$



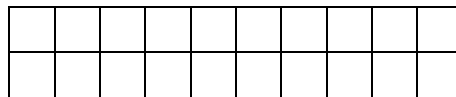
$$9 + 3 = \dots\dots$$



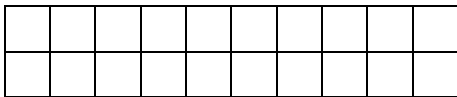
$$7 + 4 = \dots\dots$$



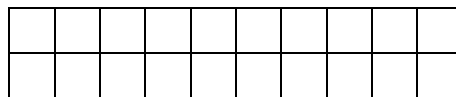
$$8 + 7 = \dots\dots$$



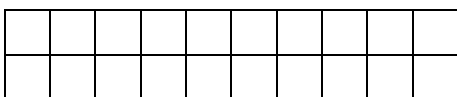
$$6 + 9 = \dots\dots$$



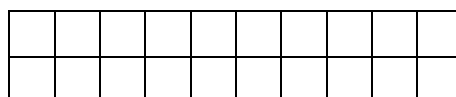
$$7 + 7 = \dots\dots$$



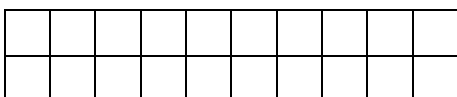
$$6 + 8 = \dots\dots$$




$$9 + 6 = \dots\dots$$



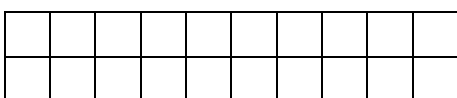
$$7 + 5 = \dots\dots$$



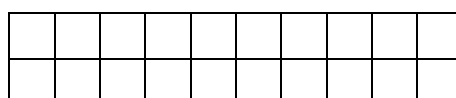
$$7 + 5 = \dots\dots$$



$$6 + 7 = \dots\dots$$

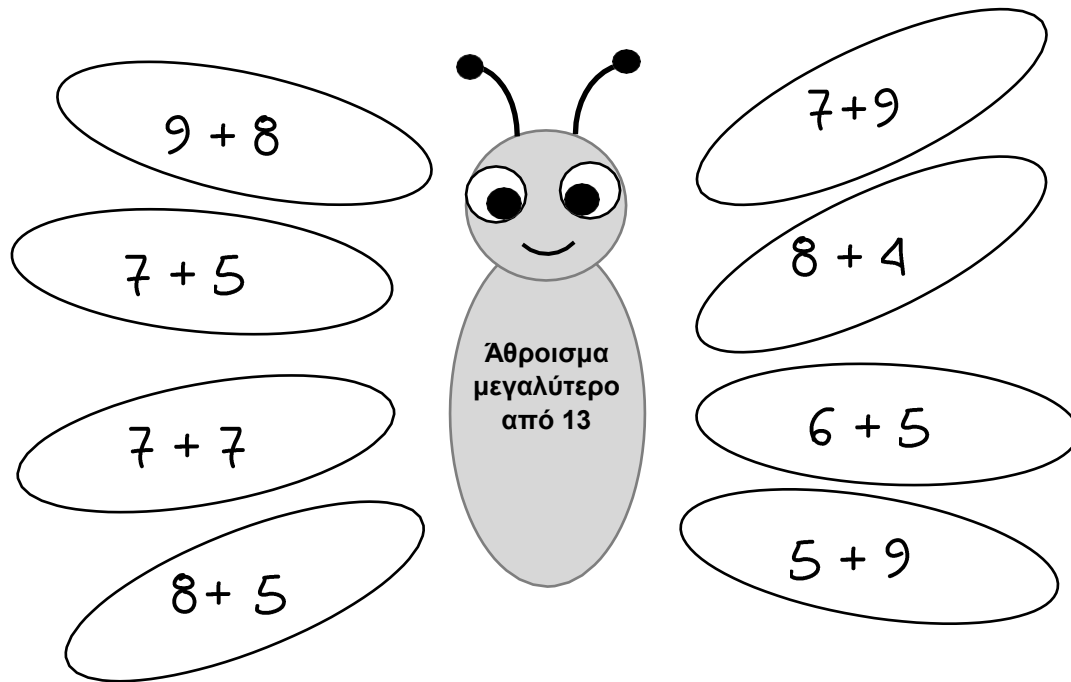


$$9 + 5 = \dots\dots$$



$$7 + 9 = \dots\dots$$

4. Χρωμάτισε τα φτερά που ανήκουν στην πεταλούδα (δηλαδή αυτά που έχουν άθροισμα μεγαλύτερο από 13):



5. Βρίσκω το άθροισμα με όποιον τρόπο θέλω:

$6 + 9 =$

$6 + 5 =$

$6 + 8 =$

$7 + 6 =$

$9 + 8 =$

$7 + 9 =$

$5 + 7 =$

$4 + 7 =$

$7 + 8 =$

$6 + 6 =$

$9 + 2 =$

$3 + 8 =$

$9 + 3 =$

$9 + 2 =$

$9 + 9 =$

$8 + 8 =$

